










# Picture and word equations




Name:	Class:	Date:
-------	--------	-------

Mark	/ 10	%
------	------	---

1) Use the clues to find out what number each picture stands for.










[1]




			Sum of row
			15
			9
			10

 = 
     
  = 
     
  =

2) Use the clues to find out what number each picture stands for.










[1]




			Sum of row
			21
			27
			19

 = 
     
  = 
     
  =

3) Use the clues to find out what number each picture stands for.










[1]




			Sum of row
			33
			33
			34

 =        =        =

4) Use the clues to find out what number each picture stands for.

[1]

			Sum of row
			38
			35
			37

 =        =        =

5) I'm thinking of a number. I add 3 to it and get an answer of 21.

[1]

What is the number I am thinking of?

6) I'm thinking of a number. I halve it and get an answer of 2.

[1]

What is the number I am thinking of?

7) I'm thinking of a number. I multiply it by 7, then take away 4 and get an answer of 31. [1]

What is the number I am thinking of?

8) I'm thinking of a number. I divide it by 4, then subtract 2 and get an answer of 4. [1]

What is the number I am thinking of?

9) I'm thinking of a number. I add 9 and then double the result. The answer is 40. [1]

What is the number I am thinking of?

10) I'm thinking of a number. I add 9 and then halve the result. The answer is 7. [1]

What is the number I am thinking of?

**Solutions for the assessment Picture and word equations**

1) 5, 2, 3

2) 7, 5, 9

3) 10, 12, 11

4) 15, 11, 12

5) 18

6) 4

7) 5

8) 24

9) 11

10) 5